

DICE GAMES



www.lessonplandiva.com



More and Less

Roll one die and write the number in the middle box. Fill in the numbers for 10 more, 10 less, 1 more, and 1 less.

Fact Families

Roll the dice and write in the 2 numbers. Add to calculate the 3rd number.
Write the complete fact family.

--	--

$$\begin{array}{rcl} _ & + & _ = _ \\ _ & + & _ = _ \\ _ & - & _ = _ \\ _ & - & _ = _ \end{array}$$

--	--

$$\begin{array}{rcl} _ & + & _ = _ \\ _ & + & _ = _ \\ _ & - & _ = _ \\ _ & - & _ = _ \end{array}$$

--	--

$$\begin{array}{rcl} _ & + & _ = _ \\ _ & + & _ = _ \\ _ & - & _ = _ \\ _ & - & _ = _ \end{array}$$

--	--

$$\begin{array}{rcl} _ & + & _ = _ \\ _ & + & _ = _ \\ _ & - & _ = _ \\ _ & - & _ = _ \end{array}$$

--	--

$$\begin{array}{rcl} _ & + & _ = _ \\ _ & + & _ = _ \\ _ & - & _ = _ \\ _ & - & _ = _ \end{array}$$

--	--

$$\begin{array}{rcl} _ & + & _ = _ \\ _ & + & _ = _ \\ _ & - & _ = _ \\ _ & - & _ = _ \end{array}$$

--	--

$$\begin{array}{rcl} _ & + & _ = _ \\ _ & + & _ = _ \\ _ & - & _ = _ \\ _ & - & _ = _ \end{array}$$

--	--

$$\begin{array}{rcl} _ & + & _ = _ \\ _ & + & _ = _ \\ _ & - & _ = _ \\ _ & - & _ = _ \end{array}$$

--	--

$$\begin{array}{rcl} _ & + & _ = _ \\ _ & + & _ = _ \\ _ & - & _ = _ \\ _ & - & _ = _ \end{array}$$



Subtraction



Roll the dice and write in the the largest number first. Write the correct difference in the box.

<div><div></div><div></div></div>	<div><div></div><div></div></div>	<div><div></div><div></div></div>	<div><div></div><div></div></div>
<div><div></div><div></div></div>	<div><div></div><div></div></div>	<div><div></div><div></div></div>	<div><div></div><div></div></div>
<div><div></div><div></div></div>	<div><div></div><div></div></div>	<div><div></div><div></div></div>	<div><div></div><div></div></div>
<div><div></div><div></div></div>	<div><div></div><div></div></div>	<div><div></div><div></div></div>	<div><div></div><div></div></div>
<div><div></div><div></div></div>	<div><div></div><div></div></div>	<div><div></div><div></div></div>	<div><div></div><div></div></div>
<div><div></div><div></div></div>	<div><div></div><div></div></div>	<div><div></div><div></div></div>	<div><div></div><div></div></div>

Addition

Roll the dice and write in the the 2 numbers. Write the correct sum.


$\begin{array}{r} \square \\ + \square \\ \hline \square \end{array}$	$\begin{array}{r} \square \\ + \square \\ \hline \square \end{array}$	$\begin{array}{r} \square \\ + \square \\ \hline \square \end{array}$	$\begin{array}{r} \square \\ + \square \\ \hline \square \end{array}$
$\begin{array}{r} \square \\ + \square \\ \hline \square \end{array}$	$\begin{array}{r} \square \\ + \square \\ \hline \square \end{array}$	$\begin{array}{r} \square \\ + \square \\ \hline \square \end{array}$	$\begin{array}{r} \square \\ + \square \\ \hline \square \end{array}$



Greater Than or Less Than

Roll the dice and write in the the 2 numbers. Write in the correct sign
in the circle. < > or =

	○	
--	---	--



	○	
--	---	--

	○	
--	---	--

	○	
--	---	--

	○	
--	---	--




	○	
--	---	--

	○	
--	---	--

	○	
--	---	--

	○	
--	---	--




	○	
--	---	--

	○	
--	---	--

	○	
--	---	--

	○	
--	---	--



	○	
--	---	--

	○	
--	---	--

	○	
--	---	--